

CANDIDATE  
NAME

--

CENTRE  
NUMBER

--	--	--	--	--

CANDIDATE  
NUMBER

--	--	--	--



**GEOGRAPHY**

**2217/23**

Paper 2

**May/June 2015**

**2 hours 15 minutes**

Candidates answer on the Question Paper.

Additional Materials:     Ruler  
                                   Calculator  
                                   Protractor  
                                   Plain paper

1:50 000 Survey Map Extract is enclosed with this Question Paper.

**READ THESE INSTRUCTIONS FIRST**

Write your Centre number, candidate number and name in the spaces provided.  
Write in dark blue or black pen.  
You may use an HB pencil for any diagrams or graphs.  
Do not use staples, paper clips, glue or correction fluid.  
**DO NOT WRITE IN ANY BARCODES.**

**Section A**

Answer **all** questions.

**Section B**

Answer **one** question.

The Insert contains Photograph A for Question 5, Photographs B and C, Table 2 and Figs 7 and 10 for Question 7, and Fig. 13 for Question 8.

The Survey Map Extract and the Insert are **not** required by the Examiner.

Sketch maps and diagrams should be drawn whenever they serve to illustrate an answer.

At the end of the examination, fasten all your work securely together.

The number of marks is given in brackets [ ] at the end of each question or part question.

This document consists of **25** printed pages, **3** blank pages and **1** Insert.

## Section A

Answer **all** questions in this section.

1 Study the 1:50 000 map extract of Alligator Pond, Jamaica.

(a) Study the grid squares of Dalton (8043), Junction (8539) and Logwood (8946) and complete the table by placing **one** tick in each row.

	Dalton	Junction	Logwood	All of these areas	None of these areas
Example – railway					✓
health centre					
mixed or scattered cultivation					
class A road					

[3]

(b) (i) Give the six figure grid reference of the post office at Top Hill.

.....[1]

(ii) Give the bearing **from** the post office at Junction **to** the post office at Top Hill.

.....[1]

(iii) What is the distance along the class B road from the post office at Junction to the post office at Top Hill?

..... metres [1]

(c) Study the area of the map shown in Fig. 1.

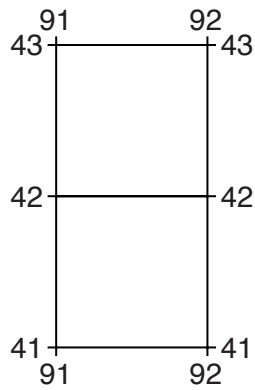


Fig. 1

(i) What is the main land use in this area?

.....[1]

(ii) Describe the relief and drainage in this area.

.....  
.....  
.....  
.....  
.....  
.....  
.....  
.....  
.....  
.....[4]



2 Study Fig. 2, which shows employment in selected urban areas.

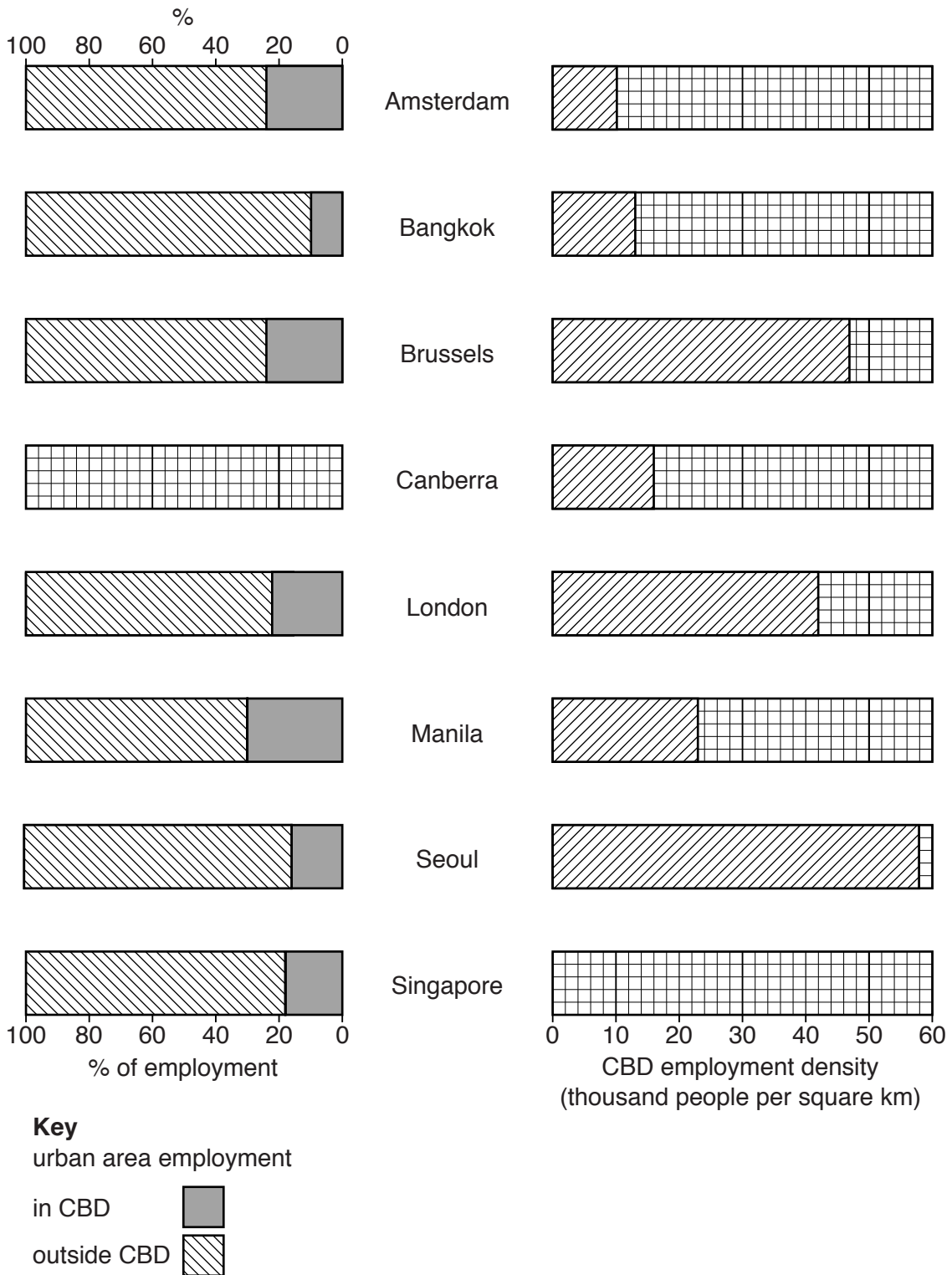


Fig. 2

(a) (i) Complete Fig. 2 to show that 16% of Canberra’s employment is in the CBD. [2]

(ii) Which urban area has the highest percentage of its employment in its CBD?

.....[1]

(iii) What is the main type of employment found in the CBD? Circle the correct answer.

primary                      secondary                      tertiary                      [1]

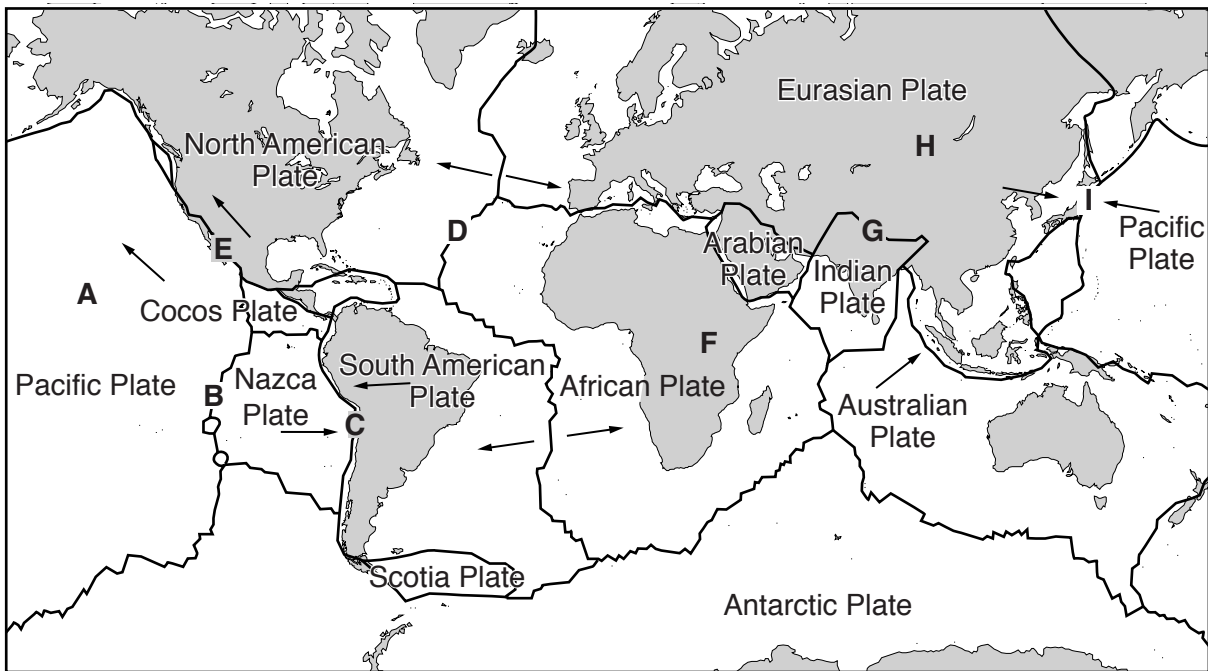
(b) (i) Complete Fig. 2 to show a CBD employment density of 39 000 people per square km in Singapore. [1]

(ii) Which urban area has the highest CBD employment density?  
.....[1]

(iii) Explain why many CBDs have a high employment density.  
.....  
.....  
.....  
.....[2]

[Total: 8 marks]

3 Study Fig. 3, which shows the world's tectonic plates and locations A – I.



**Key**  
 → direction of plate movements

**Fig. 3**

(a) (i) Identify **two** locations where constructive boundaries are found. Choose from locations **A – I**.

1 ..... 2 ..... [2]

(ii) Why is the Atlantic Ocean growing wider?

.....  
 .....  
 .....  
 ..... [2]

(b) (i) Identify **one** location where subduction is found. Choose from locations **A – I**.

..... [1]

(ii) Identify **one** location where fold mountains are found. Choose from locations **A – I**.

..... [1]

(c) Which hazards are caused by plate boundaries? Circle **two** answers.

droughts      earthquakes      floods      tropical storms      volcanoes      [2]

[Total: 8 marks]

4 Study Fig. 4, which is a table for calculating relative humidity from wet bulb and dry bulb temperature readings.

dry bulb temperature (°C)	difference between wet bulb and dry bulb temperatures (°C)												
	0	1	2	3	4	5	6	7	8	9	10	11	12
0	100	81	63	45	28	11							
2	100	83	67	51	36	20	6						
4	100	85	70	56	42	27	14						
6	100	86	72	59	46	35	22	10					
8	100	87	74	62	51	39	28	17	6				
10	100	88	76	65	54	43	33	24	13	4			
12	100	88	78	67	57	48	38	28	19	10	2		
14	100	89	79	69	60	50	41	33	25	16	8	1	
16	100	90	80	71	62	54	45	37	29	21	14	7	1

Fig. 4

(a) (i) What is a *wet bulb thermometer*?

.....  
 .....[1]

(ii) Why is the wet and dry bulb thermometer sited in a Stevenson screen?

.....  
 .....  
 .....  
 .....[2]

(b) (i) What is the relative humidity when there is no difference between the wet bulb and dry bulb temperature readings?

..... % [1]

(ii) Calculate the relative humidity when the dry bulb reading is 12°C and the wet bulb reading is 9°C. Show your working.

.....  
 .....[2]

(c) Which instruments could be kept in a Stevenson screen. Circle **two** correct answers.

anemometer    barometer    maximum-minimum thermometer    rain gauge    wind vane [2]

[Total: 8 marks]



5 Study Photograph A (Insert).

(a) Describe the relief of the area shown in Photograph A.

.....  
.....  
.....  
.....  
.....  
..... [3]

(b) Describe the vegetation shown in Photograph A.

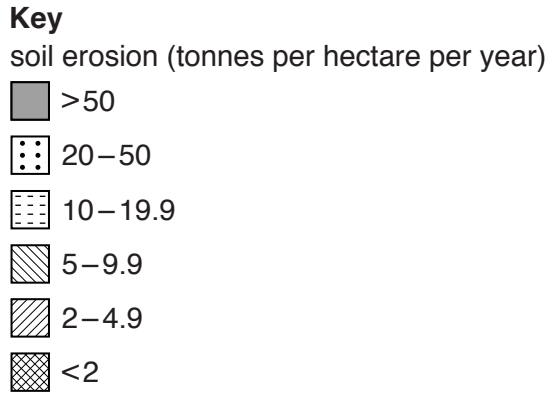
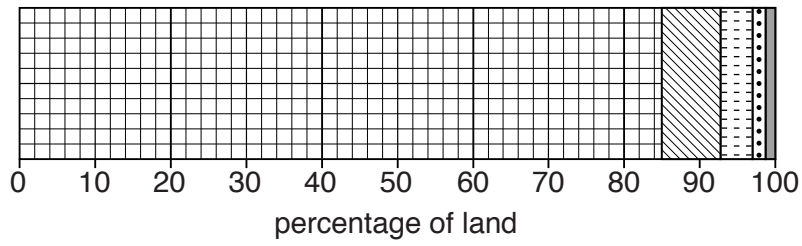
.....  
.....  
.....  
.....  
.....  
..... [3]

(c) Suggest **two** mechanical (physical) weathering processes operating in this area.

.....  
..... [2]

[Total: 8 marks]

6 Study Fig. 5, which shows the area of land affected by soil erosion by water, in Europe.



**Fig. 5**

(a) (i) Use the data in Table 1 to complete Fig. 5.

**Table 1**

tonnes per hectare per year	% of land
<2	70
2 – 4.9	15

[2]

(ii) What percentage of land in Europe loses at least 10 tonnes per hectare per year by soil erosion?

.....[1]

(b) Study Fig. 6, which shows some ways of reducing soil erosion.

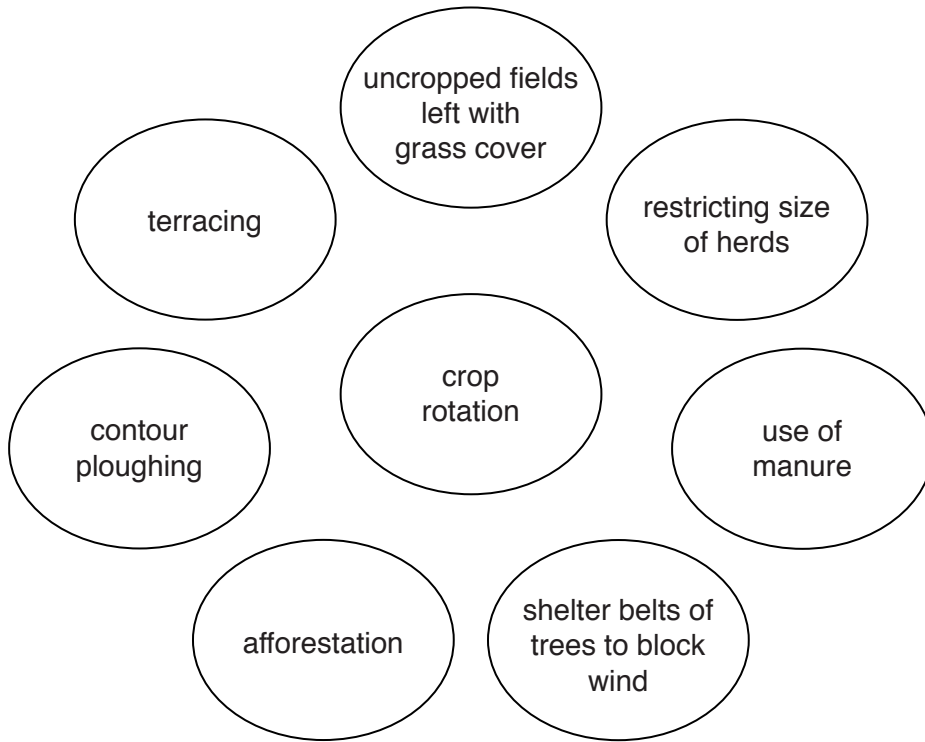


Fig. 6

(i) Suggest why some farmers would be against restricting the size of their animal herds.

.....  
.....[1]

(ii) How does afforestation help to reduce soil erosion?

.....  
.....  
.....  
.....  
.....  
.....  
.....[4]

[Total: 8 marks]

**Section B**

Answer **one** question in this section.

7 Students in southern USA read a newspaper report about pollution in a local river. They decided to do some fieldwork to investigate this. However, before they started their fieldwork, their teacher warned them about the possible dangers of working in polluted water. She also suggested some precautions they might take to protect themselves.

(a) (i) Suggest **two** dangers which their teacher may have warned them about when working in polluted water, and suggest how they might protect themselves whilst testing the level of pollution in the river.

Danger 1 .....

.....

Protection .....

.....

Danger 2 .....

.....

Protection .....

.....[4]

(ii) First the students did a visual survey of the river. Suggest **two** ways that they would be able to see from the river bank if the river was polluted.

1 .....

.....

2 .....

.....[2]

(b) The students agreed on two hypotheses to investigate.

**Hypothesis 1:** *Water pollution increases as you go downstream.*

**Hypothesis 2:** *The Biotic Index decreases as you go downstream.*

The Biotic Index is a way of measuring water pollution by looking at the animals that live in the river.

To measure the level of water pollution the students decided to measure pH and oxygen levels in the river and do a simple foam test.

- pH is a measure of the acidity of water. The pH score decreases as water becomes more acidic. More acidic water means that pollution is more likely.
- The oxygen level of water decreases as it becomes more polluted.

The students used a digital meter to measure the pH of the water. This meter is shown in Photograph B (Insert).

(i) Describe **two** ways in which the students could make sure that their measurements were reliable.

1 .....

.....

2 .....

.....[2]

(ii) To measure the oxygen level and to do the foam test the students took samples of river water back to school. One student described the classroom tests in her fieldwork notebook. This is shown in Fig. 7 (Insert).

Suggest **two** reasons why these two tests may not be as reliable as using a digital meter.

1 .....

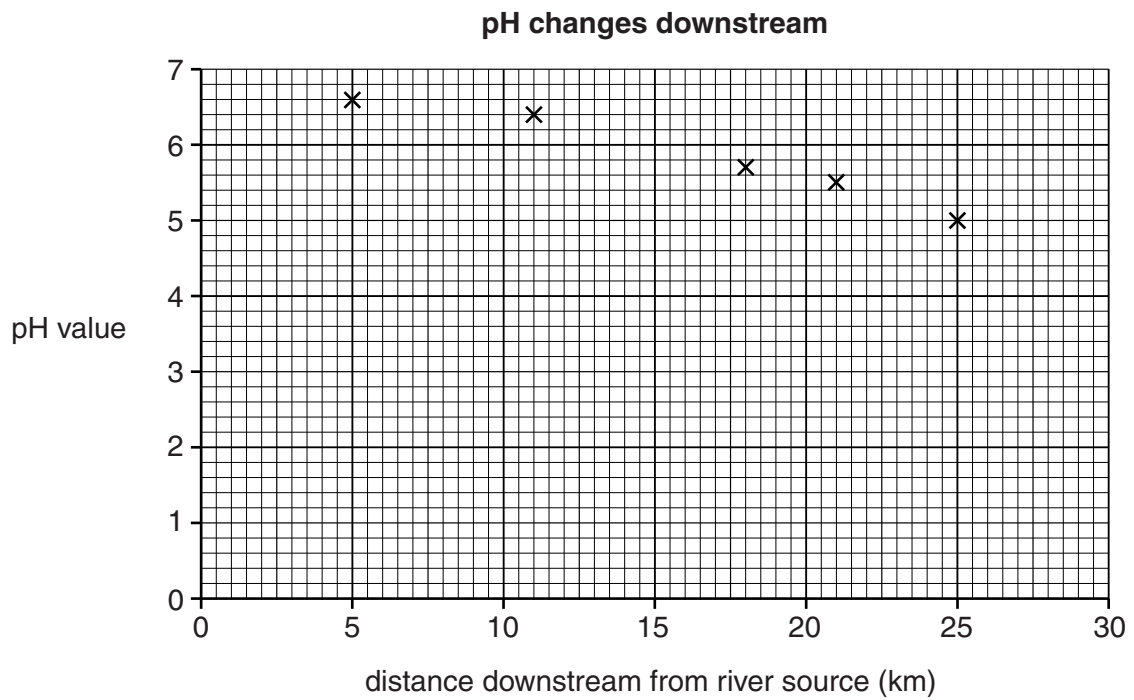
.....

2 .....

.....[2]

The students made the three measurements at five sites downstream. The results of their fieldwork are shown in Table 2 (Insert).

Fig. 8, below, shows how pH values change downstream.



**Fig. 8**



(v) Suggest **two** reasons why water pollution levels may vary along a river.

1 .....

.....

2 .....

.....[2]

(c) To investigate **Hypothesis 2: *The Biotic Index decreases as you go downstream***, the students did the investigation described in Fig. 10 and shown in Photograph C (Insert) at the five sites along the river.

(i) Before the students began working at the five fieldwork sites they did a pilot study at a place on the river near to their school. Give **two** advantages of doing a pilot study.

1 .....

.....

2 .....

.....[2]

(ii) Explain why the students disturbed the river bed when carrying out the fieldwork.

.....

.....[1]

(iii) Explain why the students needed to identify the different types of animals found at each site while sampling.

.....

.....[1]



(d) Fig. 11 below shows the students' recording sheet for site 3. They recorded their results using a tally method.

(i) Complete Fig. 11 below by recording the following information using the tally method.

Type of animal species	Number found
Scud	2
Dragonfly	5

[1]

**Recording sheet for site 3**

Group 1	Biotic score	Number found	Group 2	Biotic score	Number found	Group 3	Biotic score	Number found
Caddisfly	10	–	Sowbug	8	///	Midgefly	5	/
Mayfly	10	–	Damselfly	7	//	Blackfly	5	/
Stonefly	10	–	Crayfish	7	///	Mosquito	4	–
Water penny	10	–	Clam	6	–	Snail	4	–
Riffle beetle	9	/	Scud	6		Leech	2	–
Dobsonfly	9	–	Dragonfly	6		Aquatic worm	1	–

**Fig. 11**

(ii) Calculate the total Biotic score for Dragonfly at site 3 in Table 3 below. The total Biotic score is calculated by multiplying the Biotic score of a species by the number of this species found. [1]

**Table 3**

**Biotic Index scores at Site 3**

Species	Biotic score of species	Number of each species found	Total Biotic score
Riffle beetle	9	1	9
Sowbug	8	3	24
Damselfly	7	2	14
Crayfish	7	3	21
Scud	6	2	12
Dragonfly	6	5	
Midgefly	5	1	5
Blackfly	5	1	5
Total		18	120



(iv) The students came to the conclusion that **Hypothesis 2: *The Biotic Index decreases as you go downstream*** was correct. What evidence from Table 4 and Fig. 12 supports their conclusion?

.....  
.....  
.....  
.....[2]

(v) Look again at Fig. 10 and Table 4. How does the data about animal species in Table 4 also show that the water becomes more polluted downstream?

.....  
.....  
.....  
.....[2]

[Total: 30 marks]

- 8 Six students in Mumbai, India, wanted to find out more about people who lived in an area of the city. This was an area of squatter houses which had been improved during the previous 30 years by residents with help from the local authority.

They decided to investigate the following hypotheses:

**Hypothesis 1:** *Most families moved to Mumbai for employment.*

**Hypothesis 2:** *There are more benefits than problems for those living in the area of squatter houses.*

The students decided that the best way to test their hypotheses was to ask some people who lived in the area to answer a questionnaire.

(a) Their first task was to produce their questionnaire, which is shown in Fig. 13 (Insert).

- (i) The students then had to decide on a suitable sample size of people to answer their questionnaire. One student suggested a sample of 20 people; another student suggested a sample of 500 people. These suggestions were not approved by their teacher.

Explain why:

a sample of 20 people is too small; .....

.....

.....

a sample of 500 people is too big. ....

.....

.....[2]

- (ii) Describe a sampling method for how the students could choose 100 people to complete the questionnaire. Explain why you have chosen this method.

Name of sampling method .....

Description of method .....

.....

Explanation for choice .....

.....

.....[3]

- (iii) The students considered including more questions in their questionnaire, but decided not to.

Suggest **two** other questions they could have used to find out more about migration to the squatter settlement.

1 .....

.....

2 .....

.....[2]

(b) The results of Question 1 in the questionnaire are shown in Table 5 below.

**Table 5**

**Answers to Question 1:  
What was the main reason you moved to live here?**

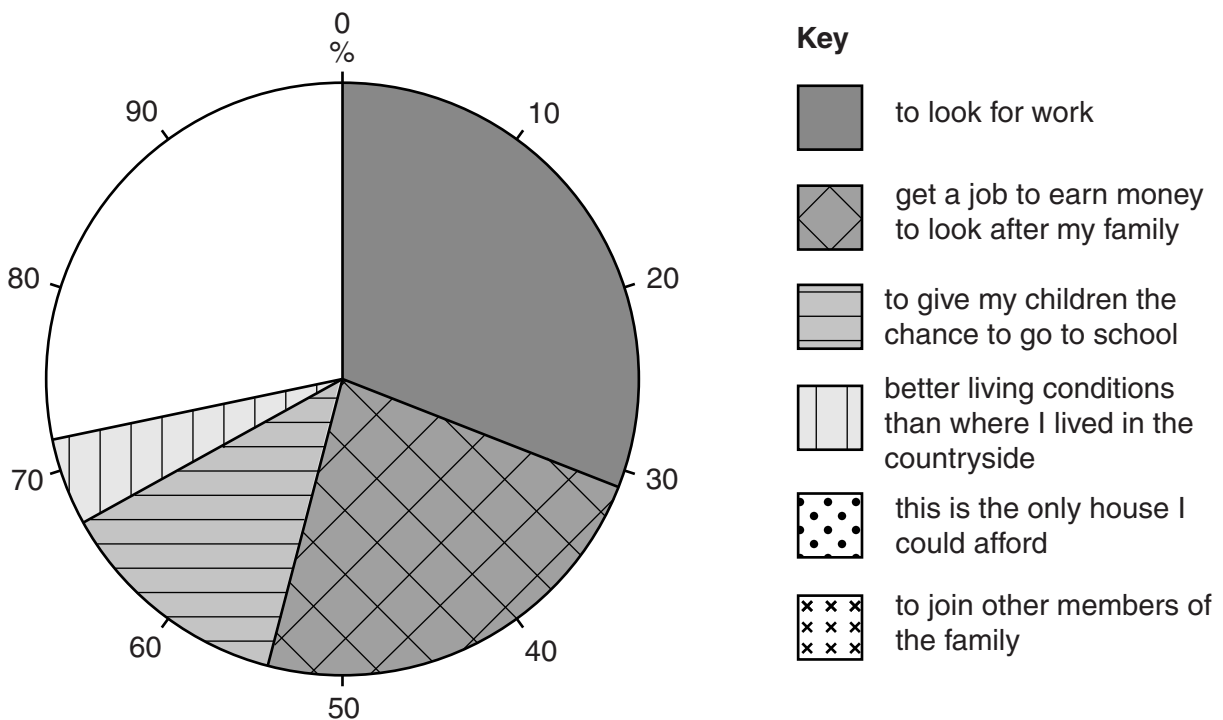
Reason given	Percentage of residents
To look for work	31
Get a job to earn money to look after my family	23
To give my children the chance to go to school	13
Better living conditions than where I lived in the countryside	5
This is the only house I could afford	10
To join other members of the family	18
Total number of answers	100

(i) Use the results in Table 5 to complete Fig. 14 below.

[2]

**Answers to Question 1**

**What was the main reason you moved to live here?**



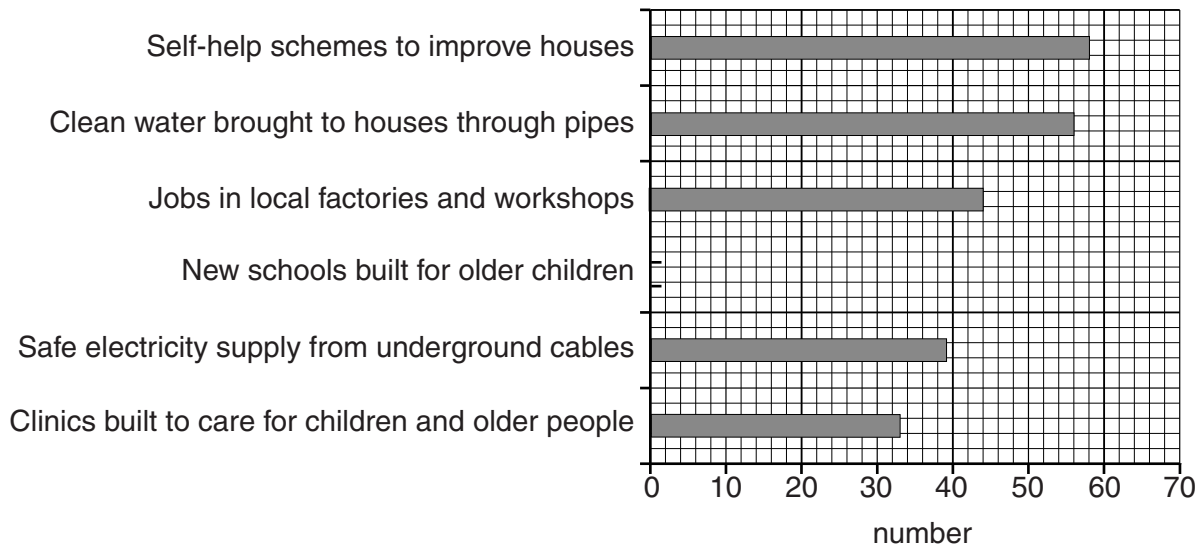
**Fig. 14**



(i) Use the results in Table 6 to complete Figs 15 and 16 below.

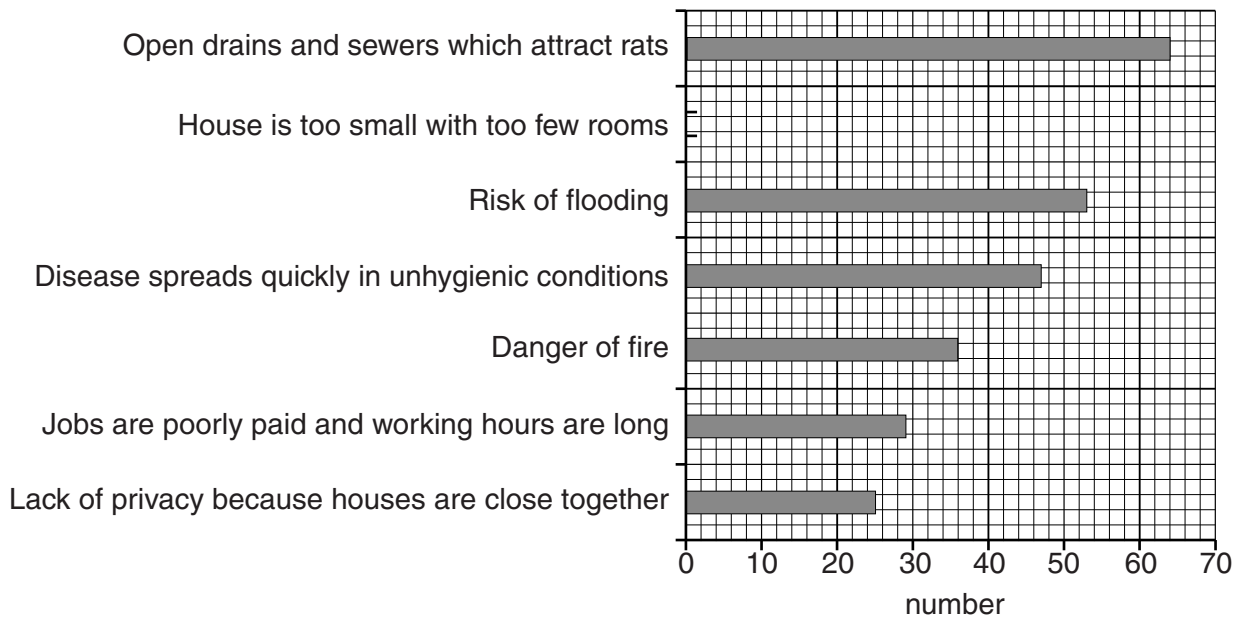
[2]

**Results of Question 2**  
**What are the main benefits of living here?**



**Fig. 15**

**Results of Question 3**  
**What are the main problems of living here?**



**Fig. 16**

- (ii) Two of the problems suggested in Table 6 are 'danger of fire' and 'risk of flooding'. Explain why these are common problems in a squatter settlement.

Danger of fire .....  
.....  
.....  
.....

Risk of flooding .....  
.....  
.....  
.....[4]

- (iii) Do the answers to Questions 2 and 3 support **Hypothesis 2**: *There are more benefits than problems for those living in the area of squatter houses?*

Explain your conclusion by using data from Figs 15 and 16 and Table 6.  
.....  
.....  
.....  
.....  
.....  
.....  
.....  
.....  
.....  
.....[4]

- (d) Suggest **three** difficulties of doing fieldwork in a squatter settlement.

1 .....  
.....  
2 .....  
.....  
3 .....  
.....[3]









**BLANK PAGE**

---

Permission to reproduce items where third-party owned material protected by copyright is included has been sought and cleared where possible. Every reasonable effort has been made by the publisher (UCLES) to trace copyright holders, but if any items requiring clearance have unwittingly been included, the publisher will be pleased to make amends at the earliest possible opportunity.

To avoid the issue of disclosure of answer-related information to candidates, all copyright acknowledgements are reproduced online in the Cambridge International Examinations Copyright Acknowledgements Booklet. This is produced for each series of examinations and is freely available to download at [www.cie.org.uk](http://www.cie.org.uk) after the live examination series.

Cambridge International Examinations is part of the Cambridge Assessment Group. Cambridge Assessment is the brand name of University of Cambridge Local Examinations Syndicate (UCLES), which is itself a department of the University of Cambridge.